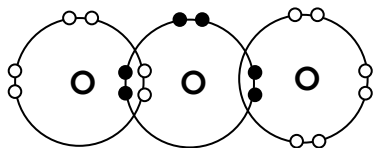
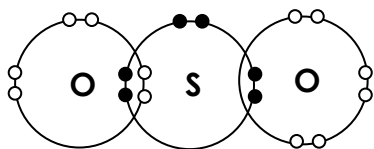
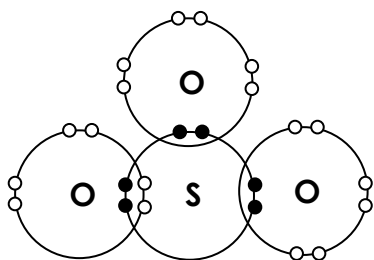
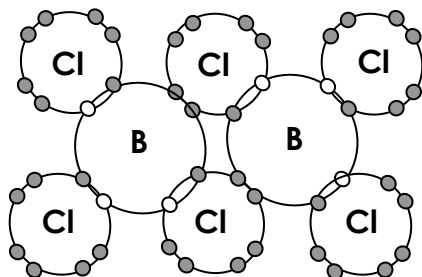


**Quiz (Dative Covalent Bond and Polyatomic ions) [Extension]**

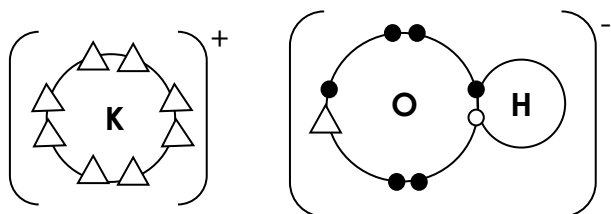
Draw the electron diagram of the following substances:

- (a)  $O_3$
- (b)  $SO_2$
- (c)  $SO_3$
- (d)  $B_2Cl_6$
- (e)  $KOH$
- (f)  $Na_3PO_4$

## Suggested Answer

(a)  $O_3$ (b)  $SO_2$ (c)  $SO_3$ (d)  $B_2Cl_6$ 

(e) KOH

(f)  $Na_3PO_4$ 