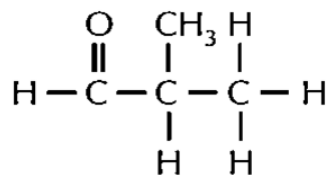


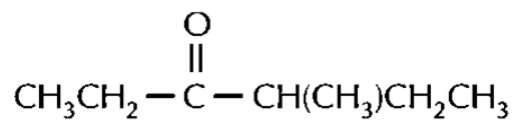
Quiz (Nomenclature of Aldehyde and Ketone)

1. Give the systematic names of the following compounds:

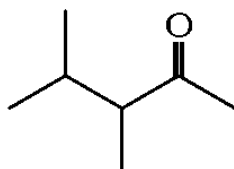
(a)



(b)



(c)



2. Write the structural formulae for

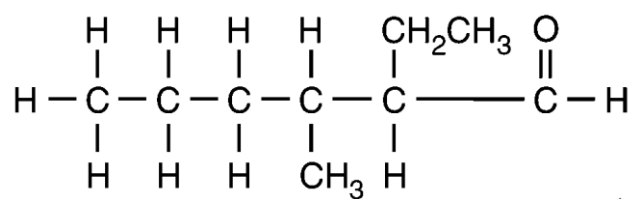
(a) 2-ethyl-3-methylhexanal

(b) 2,5-dimethylheptan-3-one

Suggested Answer

1. (a) 2-methylpropanal
- (b) 4-methylhexan-3-one
- (c) 3,4-dimethylpentan-2-one

2. (a)



- (b)

