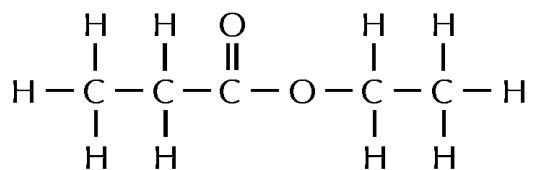


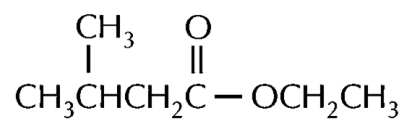
Quiz (Nomenclature of Ester)

1. Give the systematic names of the following compounds:

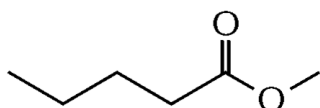
(a)



(b)



(c)



2. Write the structural formulae for

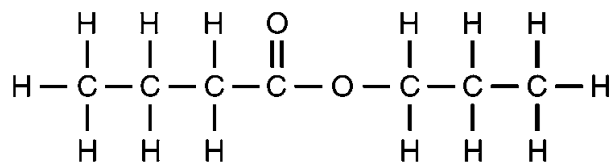
(a) propyl butanoate

(b) butyl ethanoate

Suggested Answer

- (a) Ethyl propanoate
(b) Ethyl 3-methylbutanoate
(c) Methyl pentanoate

- (a)



- (b)

