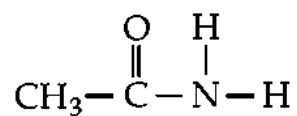


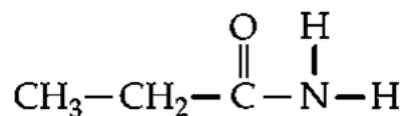
Quiz (Nomenclature of Unsubstituted Amide)

1. Give the systematic names of the following compounds:

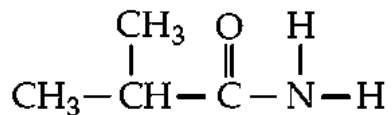
(a)



(b)



(c)



2. Write the structural formulae for

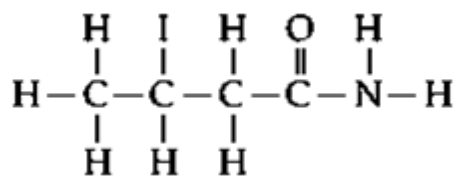
(a) 3-iodobutanamide

(b) 2,3-dibromobutanamide

Suggested Answer

- (a) Ethanamide
(b) Propanamide
(c) 2-Methylpropanamide

- (a)



- (b)

