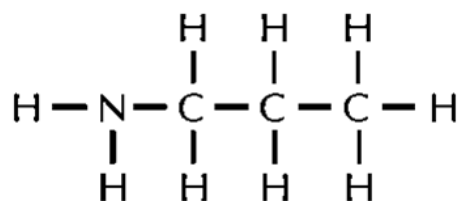


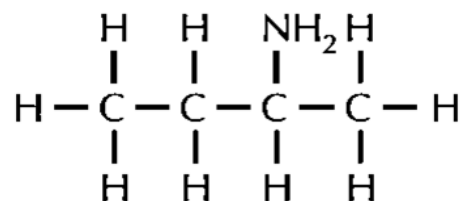
Quiz (Nomenclature of Unsubstituted Amide)

1. Give the systematic names of the following compounds:

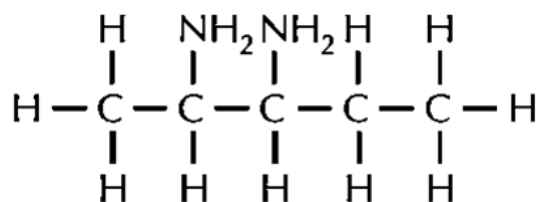
(a)



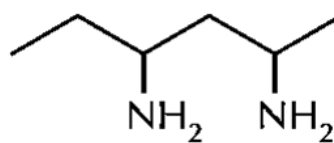
(b)



(c)



(d)



2. Write the structural formulae for

(a) 2-methylpropan-1-amine

(b) 2-ethyl-2-methylpentan-1-amine

(c) hexane-1,6-diamine

