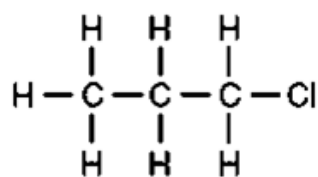


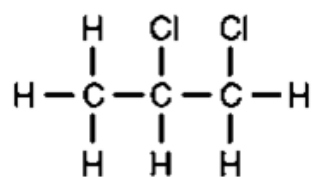
Quiz (Alkanes)

Give the systematic names and structural formulae of all possible chloropropanes and dichloropropanes that could form in the substitution reaction between propane and chlorine.

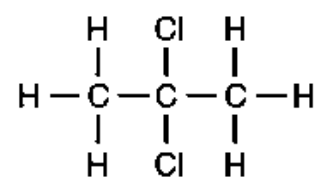
Suggested Answer



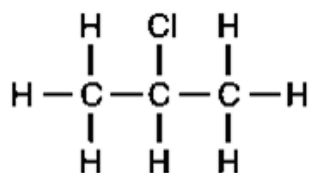
1-chloropropane



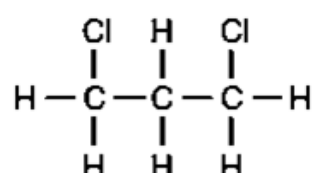
1,2-dichloropropane



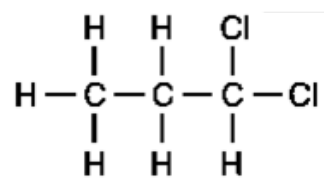
2,2-dichloropropane



2-chloropropane



1,3-dichloropropane



1,1-dichloropropane