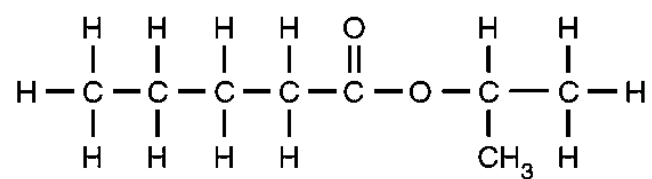


Quiz (Carboxylic Acid)

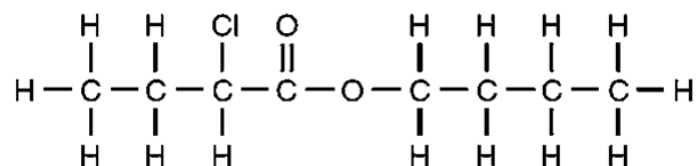
1. Write the structural formulae of the esters formed from
 - (a) pentanoic acid and propan-2-ol,
 - (b) 2-chlorobutanoic acid and butan-1-ol.
2. Write the structural formulae of the carboxylic acids needed for the preparation of
 - (a) propan-1-ol,
 - (b) pentanamide.

Suggested Answer

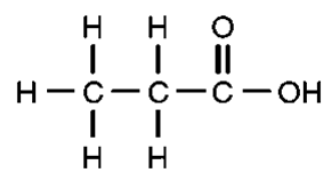
1. (a)



(b)



2. (a)



(b)

